







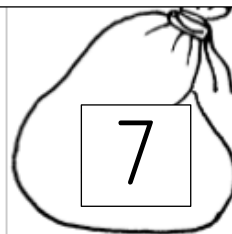

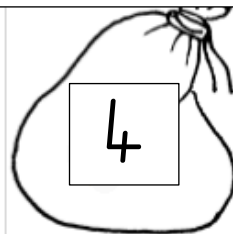








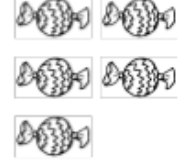

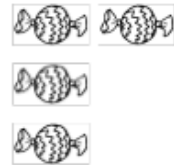


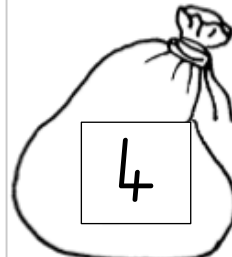





Friday: How many lollies in each bag? Count on and write the answer in the box.

 3	 <input type="text"/>	 8	 <input type="text"/>
 6	 <input type="text"/>	 8	 <input type="text"/>
 7	 <input type="text"/>	 4	 <input type="text"/>
 5	 <input type="text"/>	 3	 <input type="text"/>
 7	 <input type="text"/>	 5	 <input type="text"/>
 6	 <input type="text"/>	 7	 <input type="text"/>
 4	 <input type="text"/>	 8	 <input type="text"/>